

Math Café for Parents: Focusing on Fractions

Try these questions from this year's EQAO exams.

2 Samir has these coins.






He spends \$1.75.

How much money does he have left?

- \$2.25
- \$2.50
- \$3.50
- \$4.25

Alicia creates this pictograph about the types of birds she sees at the park.


Types of Birds at the Park

Type of bird	Number of birds
Robin	
Sparrow	
Blue jay	

How many sparrows does she see?

- 2
- 3
- 15
- 18

Key

Each  represents 6 birds.

1 Which decimal number is equivalent to $\frac{2}{5}$?

- 0.25
- 0.40
- 2.5
- 5.2

5 A bean plant grows 0.7 cm each day.

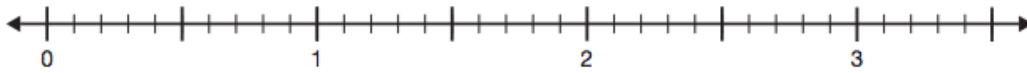
Which length is the closest to the total growth of the plant in one month?

- 28 cm
- 21 cm
- 4.9 cm
- 2.8 cm

8 The values of four points are given.

Point A	$\frac{6}{5}$
Point B	$\frac{7}{10}$
Point C	$2\frac{1}{2}$
Point D	$\frac{12}{4}$

Plot and label these points on the number line.



Draw and label Point E on the number line so that it is between Point C and Point D.

What is the value of Point E?

